



Home Learning Pack



Year 3

Thursday 23rd April 2020

Good morning Year 3!

I hope you all are well and taking care of yourselves. Here is today's work. *Please notice there is a recommended time each activity should take. Please do not go over this time.*

(20 mins) Maths: Complete ONE of the following maths activities:

- the maths activity below in your exercise book.
- Your doodle maths extra activities as set by your teacher.

(10 mins) Doodle maths / tables:

Practise your times tables on Doodle tables. *If you are unsure of your login, please contact your teacher.*

(30 mins) Writing: Complete a piece of writing linked to the picture below.

(30 mins) Reading:

Please read every day. Read a book of your choice or use the MyOn online library. (www.myon.co.uk) *If you are unsure of your login please contact your teacher.* After reading, please complete a short summary about what you have read in your exercise book (1-3 sentences).

(30 mins) Reading comprehension:

Please complete the reading comprehension in your exercise book.

(10 mins) Spelling:

Please practise 10 spellings a day using the sheet provided. Write these words in a sentence.

(30 mins) Additional Activity:




Complete the **RE** activity based on Sikhism below.




Please ensure work is well-presented and use your best handwriting!

Maths- Fractions

Answer these word problems on fractions.

Helpful hint: Drawing diagrams will help you.

<p>1. Billy ate $\frac{3}{5}$ of a pizza and Bob ate $\frac{4}{5}$ of a pizza. Who ate the most?</p> 	<p>2. Philomena had $\frac{1}{3}$ of her chocolate bar remaining and Daphne had $\frac{1}{4}$. Who had most left?</p> 	<p>3. What comes next? One tenth, two tenths, ...</p> 

<p>4. A running track is $\frac{1}{4}$ of a km long. How far would a runner go if he ran round the track 4 times?</p> 	<p>5. Hamza chopped up a pineapple and gave $\frac{1}{2}$ to his mum. He also ate half himself. How much was left to give to his dad?</p> 	<p>6. Miriam's dad offered a choice for her pocket money – have $\frac{1}{4}$ of £5 or $\frac{1}{2}$ of £5. Which should she choose?</p> 

Writing



Key Words

beautiful fantastic
lovely green leafy
noisy crowded lively
fun entertaining busy
enjoyable relaxing
wonderful pleasant

Can you write a paragraph about this setting?

Extension: Can you create a short story based on this picture?

Pet Care of a Cat



Cats are a very popular pet in the UK. They might come and go when they want, but need careful looking after.

Food and drink	Environment
<p>Cats eat meat. They are not vegetarian.</p> <p>Clean water must be put out for them to drink, so that they stay healthy.</p>	<p>Cats need a dry, comfortable place to live. They often like having a few places to sleep.</p> <p>Cats are easily scared, so they need places where they feel safe. Under beds or on the top of shelves are good places.</p>

Cat behaviour

If a cat does any of these things, it might mean they are distressed:

- licking themselves a lot;
- hiding more often;
- sleeping hunched up.

If a cat does shows this behaviour, it can mean they are in pain:

- being bad tempered or angry;
- disappearing for a long time;
- keeping away from people.



How to treat a cat

Cats will come for a cuddle when they feel ready. You must not try to force them to sit on your knee or be stroked. Remember, each cat is an individual, so will behave differently.

Things to remember:

- Cats need exercise. They need to go outside, or have toys to play with.
- Cats need to scratch their claws to keep them sharp. If they are not given a proper scratching post, they may use the sofa!

Look after them properly, and your cat will be your best friend.

Questions

1. What sort of food do cats need to eat?

2. Why do cats need clean water?

3. Which two adjectives are used to describe the type of place cats need to live in?

4. Where might a cat go to feel safe? Name one place.

5. Name one thing a cat might do to show they are distressed.

6. If a cat starts being bad tempered, what might this mean?

7. What do you need to do if you want a cat to come for a cuddle?

8. Why do cats need to scratch their claws?

9. Think of one thing you have learned about caring for a cat from this text.

RE

You are going to research Sikh Gurus. Choose two Sikh Gurus and answer the following:

Draw each guru and label with their names.

Write three things that are similar between the two gurus.

Write three things that are different between the two gurus.





Year 3/ 4 Statutory Spellings

accident	experiment	particular
accidentally	extreme	peculiar
actual	famous	perhaps
actually	favourite	popular
address	February	position
answer	forward(s)	possess
appear	fruit	possession
arrive	grammar	possible
believe	group	potatoes
bicycle	guard	pressure
breath	guide	probably
breathe	heard	promise
build	heart	purpose
busy	height	quarter
business	history	question
calendar	imagine	recent
caught	increase	regular
centre	important	reign
century	interest	remember
certain	island	sentence
circle	knowledge	separate
complete	learn	special
consider	length	straight
continue	library	strange
decide	material	strength
describe	medicine	suppose
different	mention	surprise
difficult	minute	therefore
disappear	natural	though
early	naughty	(although)
earth	notice	thought
eight	occasion	through
eighth	occasionally	various
enough	often	weight
exercise	opposite	woman
experience	ordinary	women